



**Cambridge International Examinations**  
Cambridge Primary Checkpoint

CANDIDATE  
NAME

CENTRE  
NUMBER

--	--	--	--	--

CANDIDATE  
NUMBER

--	--	--	--

---

**MATHEMATICS**

**0845/02**

Paper 2

**For Examination from 2014**

SPECIMEN PAPER

**45 minutes**

Candidates answer on the Question Paper.

Additional Materials:

Pen  
Pencil  
Ruler

Protractor

Calculator

---

**READ THESE INSTRUCTIONS FIRST**

Write your Centre number, candidate number and name in the spaces at the top of this page.

Write in dark blue or black pen.

Answer **all** questions.

The number of marks is given in brackets [ ] at the end of each question or part question.

You should show all your working in the booklet.

The total number of marks for this paper is 40.

---

This document consists of 17 printed pages and 1 blank page.

1 Complete the table.

The first row has been done for you.

In words	In figures
Six hundred and forty	640
Seven thousand, nine hundred and six	
	2079

[1]

2 Use either  $<$  or  $>$  to make each statement correct.

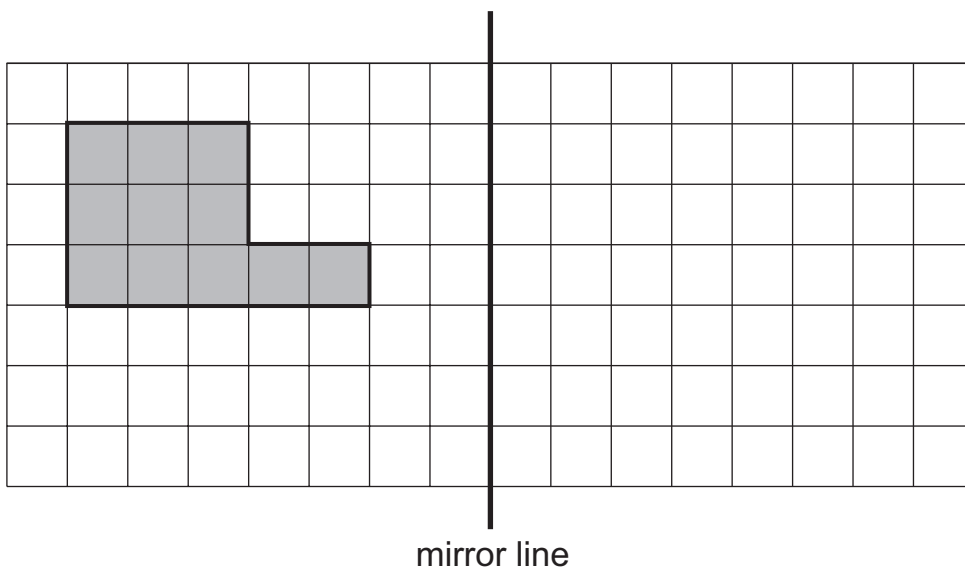
$$112 \quad \square \quad 102$$

$$1121 \quad \square \quad 1211$$

$$2111 \quad \square \quad 1112$$

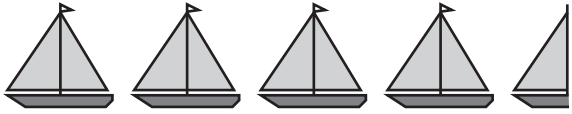
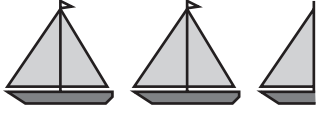
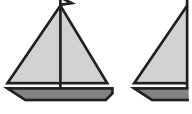


[1]



3 Draw the reflection of the shape in the mirror line.



[1]

4 George counts the number of boats sailing into a harbour on 5 days.

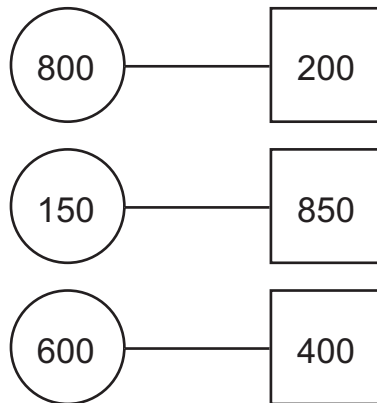
Monday	
Tuesday	
Wednesday	
Thursday	
Friday	

**Key**  represents 10 boats  
 represents 5 boats

How many boats does George count sailing into the harbour altogether?

..... boats [1]

- 5 (a) Each diagram shows a pair of numbers, one in a circle and one in a square.

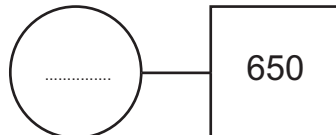


Describe the connection between the pairs of numbers.

.....

..... [1]

- (b) The numbers in this diagram are connected in the same way.  
Fill in the missing number.



[1]

- 6 Draw a ring around the number which has the digit 5 in the thousands column.

65 302

51 302

69 502

48 352

[1]

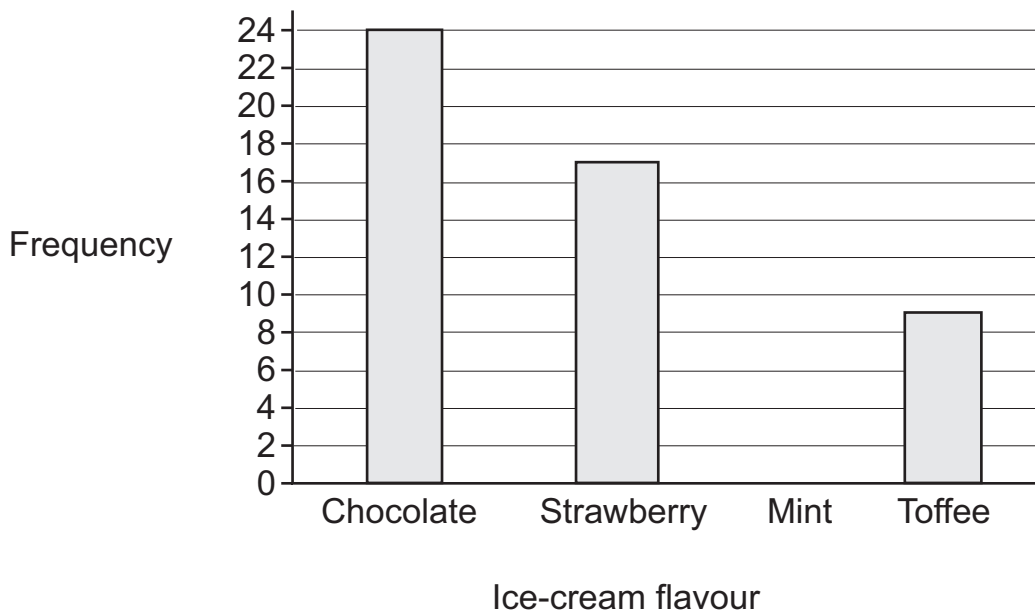
- 7 Marcel sells ice-creams.  
One day he keeps a tally of his sales.

Flavour	Tally	Frequency
Chocolate		24
Strawberry		
Mint		13
Toffee		

- (a) Complete the frequency column.

[1]

- (b) He puts all of this information into a bar chart. Draw the bar for mint.




[1]

- 8 Write the missing number.

$$\frac{1}{3} + \boxed{\quad} = 1$$

[1]

9 Tina has these three cards.



Use each card **once** to make the largest possible number that will divide by 5 exactly.

--	--	--

[1]

10 Put a tick (✓) next to the calculation that is the same as  $\frac{1}{4}$  of 12

$12 \times 4$

$12 - 4$

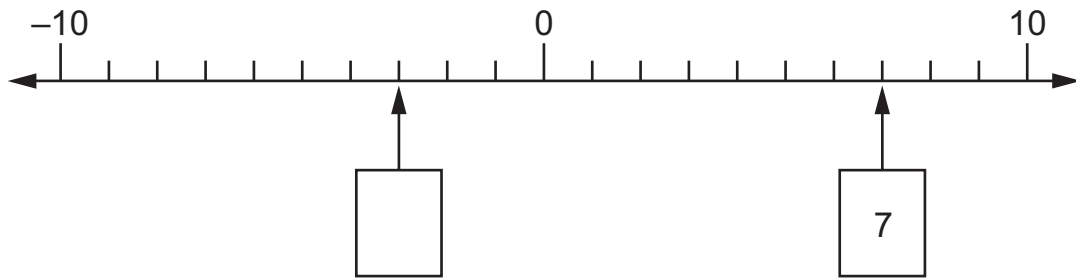
$12 + \frac{1}{4}$

$12 \div 4$

$12 - \frac{1}{4}$

[1]

- 11 The difference between the two numbers in boxes shown on this line is 10  
Write the missing number in the box.



[1]

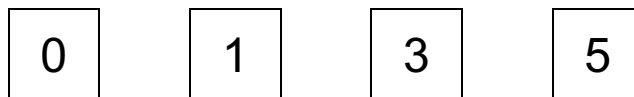
- 12 (a) Round 8375 to the nearest thousand.

..... [1]

- (b) Round 3.66 to the nearest tenth.

..... [1]

- 13 Here are four digit cards.



Use these cards to complete this calculation. Each card must only be used once.

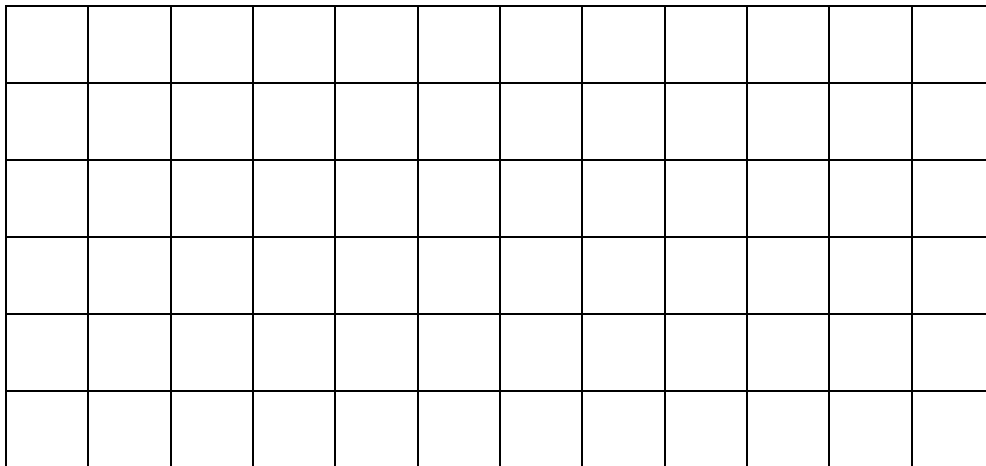
$$\boxed{\phantom{0}}\boxed{\phantom{0}} \times \boxed{\phantom{0}}\boxed{\phantom{0}} = 450$$

[1]

14 (a) Clara is investigating the following statement:

Some quadrilaterals have exactly two lines of symmetry.

On the grid below, draw an example of a shape that shows this statement to be **true**.



[1]

(b) Adam is investigating this statement:

Some triangles contain exactly two right angles.

Explain why this statement is **false**.

.....

.....

[1]



- 15 Complete the table of equivalent fractions, decimals and percentages.

Fraction	Decimal	Percentage
$\frac{1}{2}$	0.5	50%
	0.4	
$\frac{3}{4}$		

[2]

- 16 Here is a number grid.

74	75	76
84	85	86
94	95	96

Circle the number that can be divided by 7 with a remainder of 1.

[1]

- 17 What is the missing number?

$$\boxed{\phantom{000}} \div 5 = 24$$

[1]

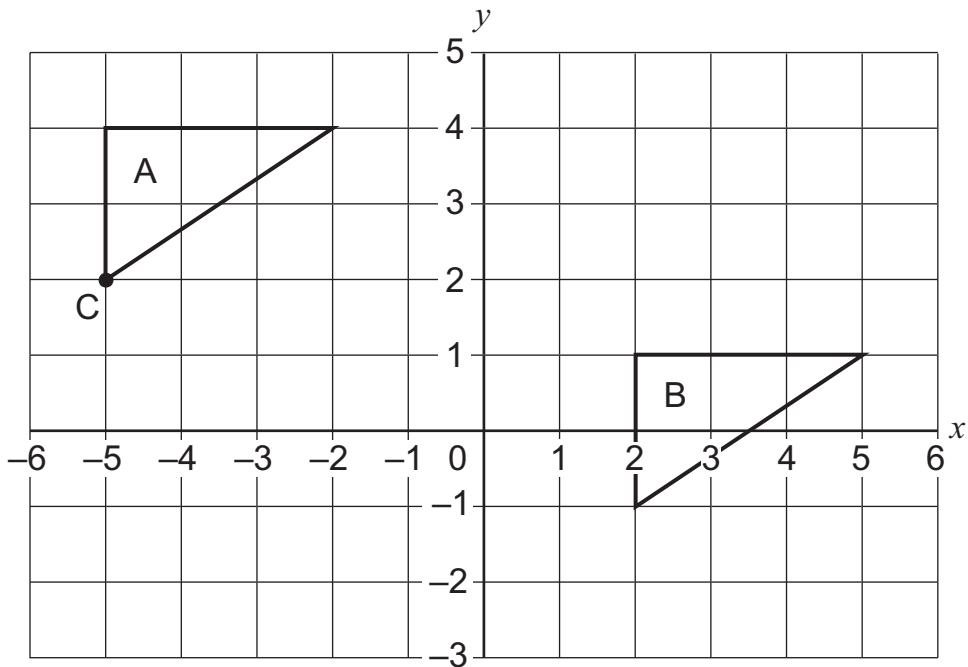
- 18 A model of a car is one tenth of the size of the real car.  
The model measures 42 cm long.



What is the length of the real car?  
Give your answer in centimetres.

..... cm [1]

- 19 Here are 2 triangles on a grid.



- (a) What are the co-ordinates of point C?

( ..... , ..... ) [1]

- (b) Describe the translation that moves triangle A to triangle B.

..... [1]

20 Use one of the symbols to complete each number sentences.

<      =      >

$$\frac{5}{8} \quad \square \quad \frac{3}{8}$$

$$\frac{6}{8} \quad \square \quad \frac{3}{4}$$

$$\frac{3}{8} \quad \square \quad \frac{1}{2}$$

[1]

21 The distance between two towns is 50 miles.

Tick (✓) the best approximation of 50 miles in kilometres.

8 kilometres

30 kilometres

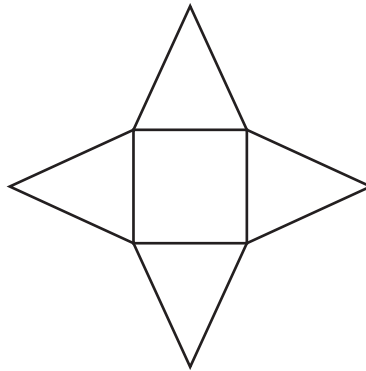
80 kilometres

200 kilometres

500 kilometres

[1]

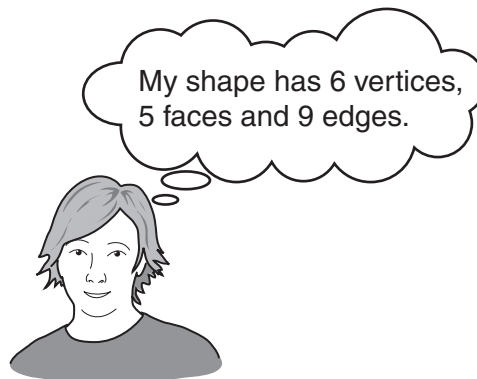
22 Here is a net of a 3D shape.



(a) What 3D shape does it make? .....

[1]

(b) Alex thinks of a 3D shape.



Write down the name of the 3D shape Alex is thinking of.

..... [1]

23 Here are four measurements.

20 cm

1 m

30 mm

2.5 cm

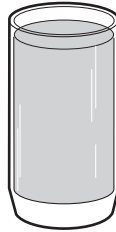
Order the measurements from smallest to largest.

smallest

largest

[1]

24 A glass holds 225 millilitres of water.



Peter drinks 1.8 litres of water during a day.

How many glasses of water does he drink during the day?

..... [1]

**25 (a)** Layla is writing the prime numbers in order.


Write in the prime numbers she has missed.

2, 3, 5, 7, ....., 13, ....., 19, 23 [1]


**(b)** Write the next two numbers in the sequence.

1, 4, 9, 16, 25, ....., ....., [1]

26 Here are two bags.



bag A



bag B

Bag A has 1 black bead and 3 white beads.  
Bag B has 2 white beads and 6 black beads.

Isaac takes a bead without looking from each bag in turn.

- (a) What is the probability of Isaac taking a black bead from bag A?  
Draw a ring around one answer.

certain      impossible      even      likely      unlikely

[1]

- (b) What is the probability of Isaac taking a black bead from bag B?  
Mark your answer with an arrow ( $\downarrow$ ) on the probability line.



[1]

27 Here is part of a train timetable.

Both trains take the same time to travel between stations.

	Train A	Train B
Longfield	09 39	12 31
Stoneton	09 56	12 48
Middleton	10 20	
Churchville	10 28	13 20
Postley	10 33	13 25

(a) Fill in the missing time for Train B. [1]

(b) What is the journey time between Longfield and Churchville?

..... minutes [1]

28 The price of a coat is \$45

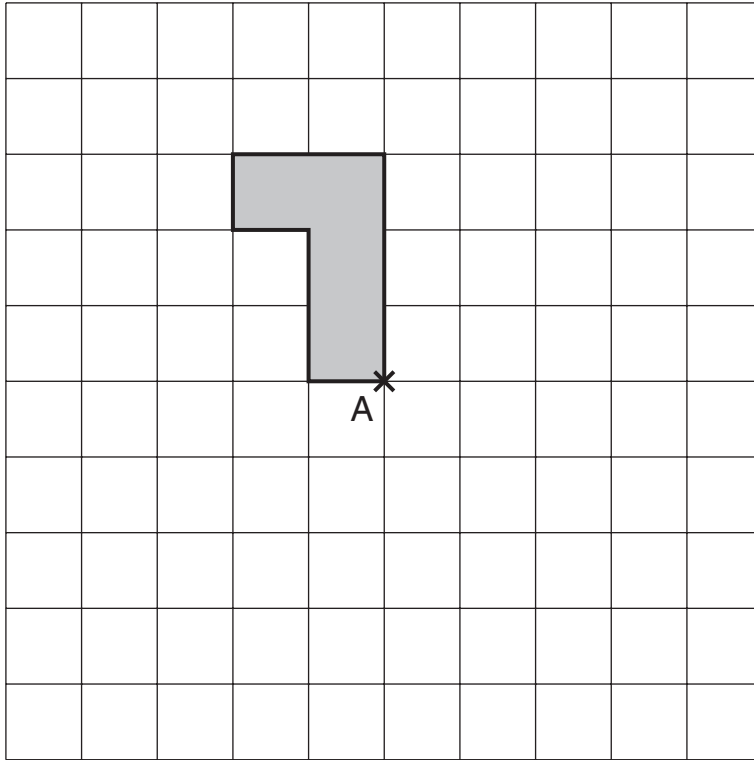
In a sale the price is reduced by 15%.

Work out the price of the coat in the sale.

\$ ..... [1]



29 Rotate the shape clockwise through an angle of  $90^\circ$  about vertex A.



[1]

30 Fill in the missing digits to make this addition correct.

2	6		+	5		4	=		1	7
---	---	--	---	---	--	---	---	--	---	---

[1]

**BLANK PAGE**

---

Permission to reproduce items where third-party owned material protected by copyright is included has been sought and cleared where possible. Every reasonable effort has been made by the publisher (UCLES) to trace copyright holders, but if any items requiring clearance have unwittingly been included, the publisher will be pleased to make amends at the earliest possible opportunity.

Cambridge International Examinations is part of the Cambridge Assessment Group. Cambridge Assessment is the brand name of University of Cambridge Local Examinations Syndicate (UCLES), which is itself a department of the University of Cambridge